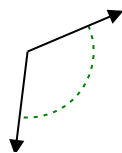




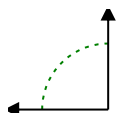
Determine if the angle shown is acute, obtuse, right or straight.

Answers

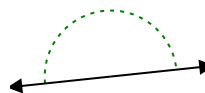
Ex)



1)



2)

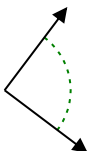


Ex. obtuse

1. _____

2. _____

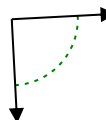
3)



4)



5)



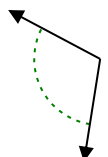
3. _____

4. _____

6)



7)



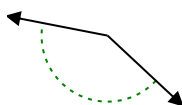
8)



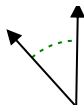
6. _____

7. _____

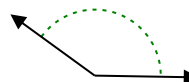
9)



10)



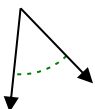
11)



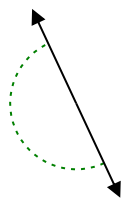
9. _____

10. _____

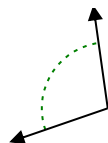
12)



13)



14)

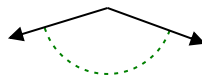


12. _____

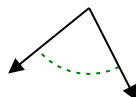
13. _____

14. _____

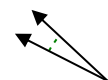
15)



16)



17)

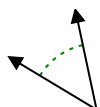


15. _____

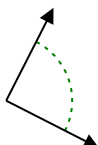
16. _____

17. _____

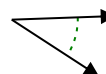
18)



19)



20)



18. _____

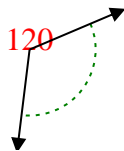
19. _____

20. _____

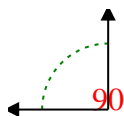


Determine if the angle shown is acute, obtuse, right or straight.

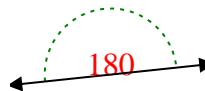
Ex)



1)



2)



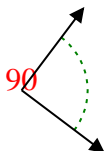
Answers

Ex. obtuse

1. right

2. straight

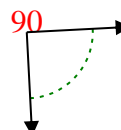
3)



4)



5)

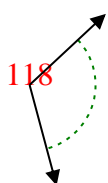


3. right

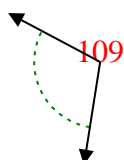
4. acute

5. right

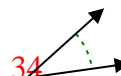
6)



7)



8)

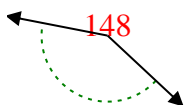


6. obtuse

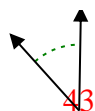
7. obtuse

8. acute

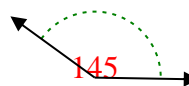
9)



10)



11)

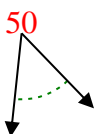


9. obtuse

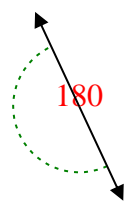
10. acute

11. obtuse

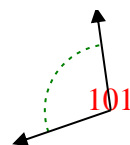
12)



13)



14)



12. acute

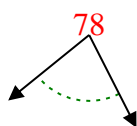
13. straight

14. obtuse

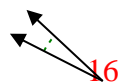
15)



16)



17)



15. obtuse

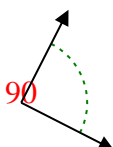
16. acute

17. acute

18)



19)



20)



18. acute

19. right

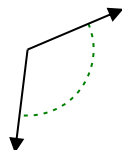
20. acute



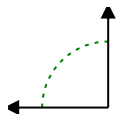
Determine if the angle shown is acute, obtuse, right or straight.

Answers

Ex)



1)



2)

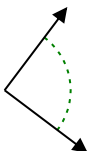


Ex. obtuse

1. _____

2. _____

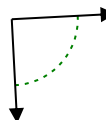
3)



4)



5)



3. _____

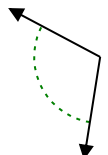
4. _____

5. _____

6)



7)



8)

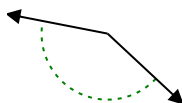


6. _____

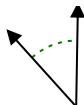
7. _____

8. _____

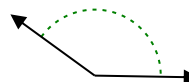
9)



10)



11)

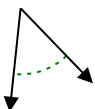


9. _____

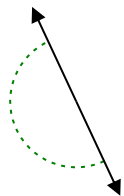
10. _____

11. _____

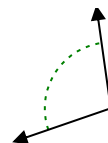
12)



13)



14)

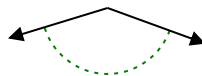


12. _____

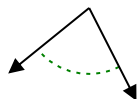
13. _____

14. _____

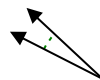
15)



16)



17)

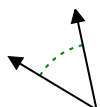


15. _____

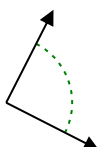
16. _____

17. _____

18)



19)



20)



18. _____

19. _____

20. _____